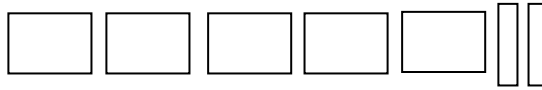


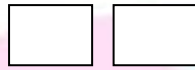
Addition & Subtraction: Worksheet -4

1. Write the number you see and then draw the number you need.

a) make 600



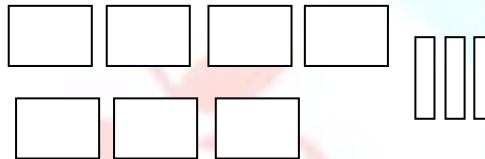
b) make 300



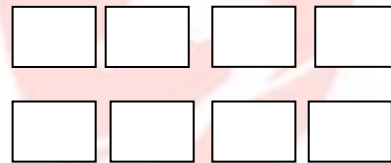
c) make 400



d) make 800



e) make 900

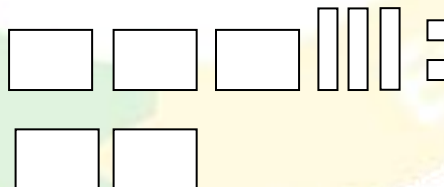


2. Write the number you see and then draw the number you need.


a) make 200



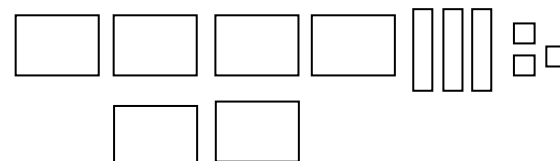
b) make 600



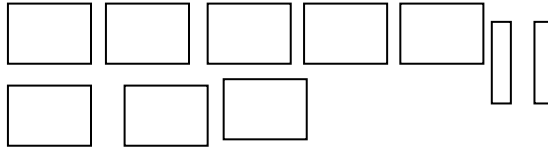
c) make 500



d) make 800



e) make 900



3. Write how many ones, tens (or) hundreds you need to add to make the new number.

| S. No. | Given number | New number | Hundreds | Tens | Ones |
|--------|--------------|------------|----------|------|------|
| 1 | 236 | 410 | | | |
| 2 | 428 | 500 | | | |
| 3 | 600 | 642 | | | |
| 4 | 834 | 900 | | | |
| 5 | 192 | 320 | | | |

4. Write how many ones, tens (or) hundreds you need to subtract to make the new number.

| S. No. | Given number | New number | Hundreds | Tens | Ones |
|--------|--------------|------------|----------|------|------|
| 1 | 482 | 300 | | | |
| 2 | 268 | 152 | | | |
| 3 | 800 | 728 | | | |
| 4 | 510 | 400 | | | |
| 5 | 626 | 500 | | | |

HOTS:

1. Which is the greatest even number formed by using the digits 7, 4 and 8 only once?

