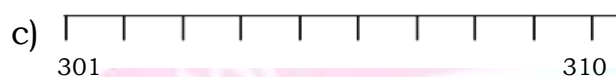
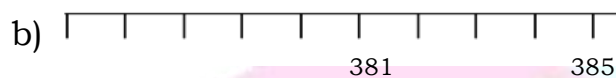
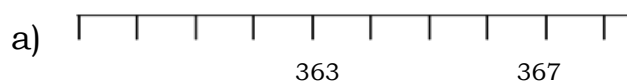


Numbers (200 – 1000): Worksheet -7

1. Write the numbers in number line.



2. Write the numbers in number grid.

a)

343			

b)

381	56

c)

365			

d)

316	

e)

			334
	342		

f)

		316
324		
		67

b



3. Fill in the blanks :

- a) After number of 360 is _____.
- b) Before number of 389 is _____.
- c) After number of 305 is _____.
- d) Before number of 381 is _____.
- e) Between number of 314 and 316 is _____.
- f) Between number of 369 and 371 is _____.

4. Match the following.

- A)

--	--	--

--	--	--

 [] a) 350
- B)

--	--	--

--	--	--

 [] b) 330
- C)

--	--	--

--	--	--

--	--	--

 [] c) 303
- D)

--	--	--

--	--	--	--	--

 [] d) 305
- E)

--	--	--

--	--	--	--	--	--	--

 [] e) 333

HOTS:

1. How many tens are needed to make 336 into 386.

