

Measurement: Worksheet -7

1. Draw a simple balance.

2. If the plate in the simple balance going down means the object is heavier / lighter?

3. If the plate in the simple balance going up means the object is heavier / lighter?

4. If the both the plates are in same position what does it mean.

5. Compare the weights using simple balance:


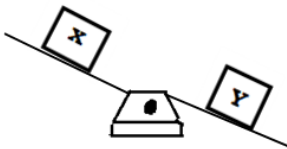
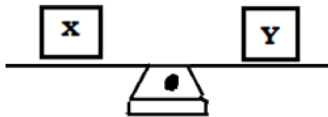
Objects	a) Pen and eraser	b) Book and box	c) Sharpener and pencil
Heavier			
Lighter			

6. Arrange the given objects in the order from lightest to heaviest.
 - a) Book, chair, duster, pencil
 - b) Box, plank, crayon, gum bottle
 - c) Mobile phone, Table, T.V., Computer

7. Arrange the given objects in the order from heaviest to lightest.
 - a) Table, bed, chair, bag
 - b) Bag, pencil, book, eraser
 - c) Box, mirror, comb, brush
 - d) Clock, chain, bangle, watch



8. Write the heavier and lighter objects by looking at the picture.

Object	Heavier	Lighter
		
		
		

HOTS:

1. Which ball is the heaviest.

