




Measurement: Worksheet -2

1. Compare the length of given objects and write the longest object.
 - a) Comb and pen
 - b) Book and eraser
 - c) Box and spoon
2. Arrange the given objects from longest to shortest.
 - a) Pencil box, eraser, pencil
 - b) Spoon, box, bottle
 - c) Table, chain, black board
 - d) Pencil, crayon, sketch pen
3. Compare heights of any 4 of your friends who is tallest among them.
4. Which is the longest pencil?

P 

Q 

R 
5. Arrange the given objects from shortest to longest.
 - a) Cup, plate, bottle
 - b) Kettle, tea cup, spoon
 - c) Bucket, brush, mug
 - d) Book, scale, crayon
 - e) Eraser, pencil, sharpener

