

Multiplication: Worksheet -13

1. Write the multiplication sentences for the following sentence.

a) $4 + 4 + 4$

b) 4

c) $4 + 4 + 4 + 4 + 4$

d) $4 + 4$

2. Refer to the image and fill in the blanks.

a)

--	--	--	--

 _____ rows of _____

b)

 _____ rows of _____

c)

 _____ rows of _____

3. Do the following.

a) Draw 3 rows of 4

b) Draw 2 rows of 4




c) Draw 1 rows of 4

4. There are 4 pens in a box. Find the number of pens in 5 boxes ?

5. Frame a story problem for a sentence $2 \times 4 = 8$.

6. Draw a picture to show $3 \times 4 = 12$.



_____ groups of _____ balloons

_____ \times _____ = _____



8. Fill in the blanks.

a) $3 \times 4 = \underline{\hspace{2cm}}$

b) $2 \times \underline{\hspace{2cm}} = 4 \times \underline{\hspace{2cm}}$

c) $3 \times 0 = \underline{\hspace{2cm}}$

d) $\underline{\hspace{2cm}} \times 4 = 4$

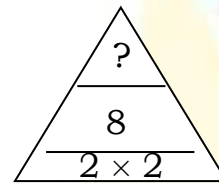
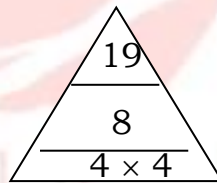
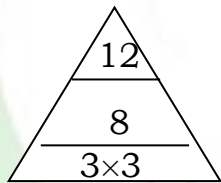
e) $4 \times \underline{\hspace{2cm}} = 6 \times \underline{\hspace{2cm}}$

f) $5 \times 4 = \underline{\hspace{2cm}}$

g) $4 \times 3 = \underline{\hspace{2cm}}$

HOTS:

1. Look at the pattern given



2. Find the missing number.

$$4 \times 8 = 2 \times \underline{\hspace{2cm}} + 16$$

