

Multiplication: Worksheet -12

1. Write the multiplication sentences for the following sentence.

a) $3 + 3$

b) 3

c) $3 + 3 + 3 + 3$

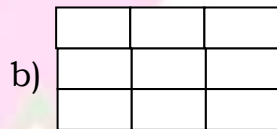
d) $3 + 3 + 3 + 3 + 3 + 3$

2. Refer to the image and fill in the blanks.



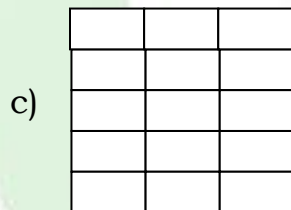
_____ rows of _____

_____ \times _____ = _____



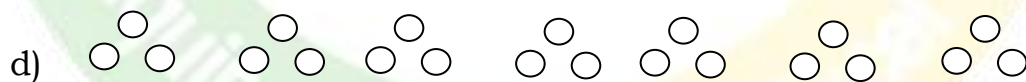
_____ rows of _____

_____ \times _____ = _____



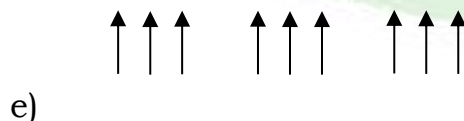
_____ rows of _____

_____ \times _____ = _____



_____ groups of _____ balls

_____ \times _____ = _____



_____ groups of _____ Arrows

_____ \times _____ = _____



3. Draw a picture to show the following multiplication sentence.

a) 4 rows of 3

$$4 \times 3 = 12$$

b) 5 rows of 3

$$5 \times 3 = 15$$

c) 2 rows of 3

$$2 \times 3 = 6$$

4. Draw a picture to show the following multiplication sentence.

a) $6 \times 3 = 18$

b) $4 \times 3 = 12$



5. Frame a story problem for $2 \times 3 = 6$.

6. Write 3 table.

