

## Multiplication: Worksheet -5

1. Draw a picture represents

- a) 4 groups of 3
- b) 3 groups of 3
- c) 5 groups of 4
- d) 8 groups of 4

2. Write an addition sentence. Write a multiplication sentence.

Find how many are there in all.

a) O O O O O

O O O O O

O O O O O

O O O O O

\_\_\_ + \_\_\_ + \_\_\_ + \_\_\_ = \_\_\_

\_\_\_ × \_\_\_ = \_\_\_

b) O O O

O O O

O O O

\_\_\_ + \_\_\_ + \_\_\_ = \_\_\_

\_\_\_ × \_\_\_ = \_\_\_

c) O O O O

O O O O

O O O O

O O O O

\_\_\_ + \_\_\_ + \_\_\_ + \_\_\_ + \_\_\_ = \_\_\_

\_\_\_ × \_\_\_ = \_\_\_

d) O O O

O O O

O O O

O O O

O O O

O O O

\_\_\_ + \_\_\_ + \_\_\_ + \_\_\_ + \_\_\_ + \_\_\_ = \_\_\_

\_\_\_ × \_\_\_ = \_\_\_



3. Draw your own picture to show

$$6 \times 4 = 24$$

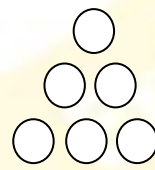
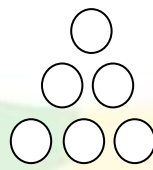
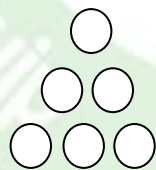
4. Draw your own picture to show

$$3 \times 4 = 12$$

5. Draw your own picture to show

$$4 \times 5 = 20$$

6. Write a story problem and a multiplication sentence for the picture.



**HOTS :**

1. What does  $\triangle$  stand for ?

$$\square + \square = 100$$

$$\triangle \times \triangle = 100$$

