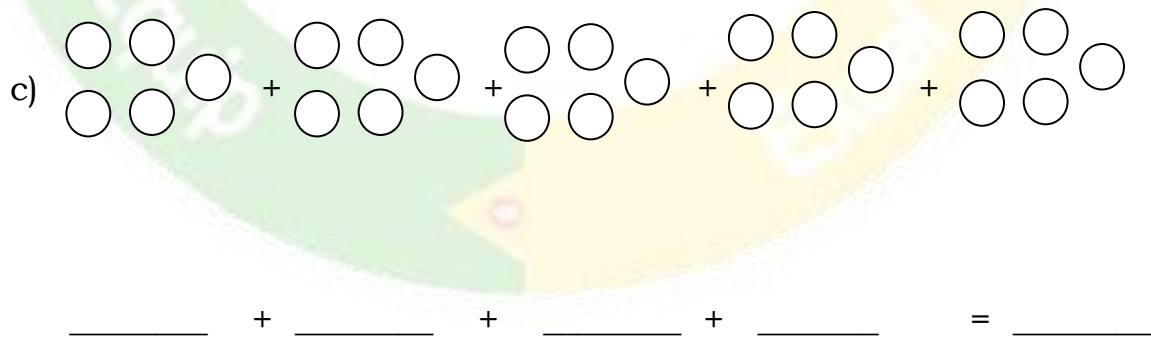
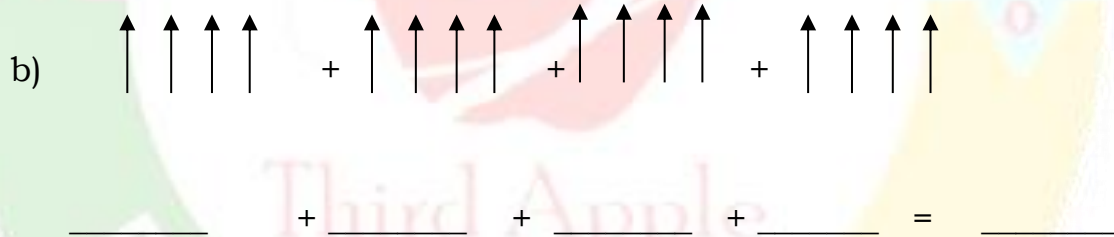
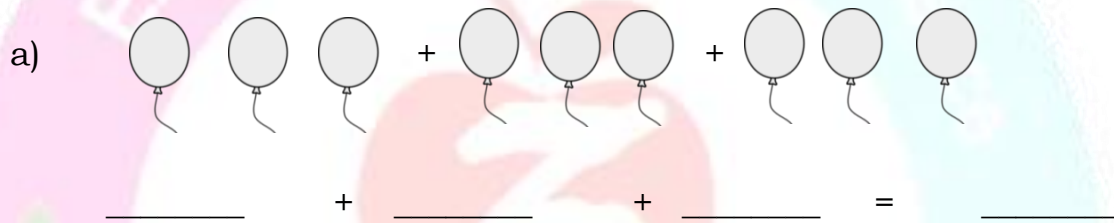
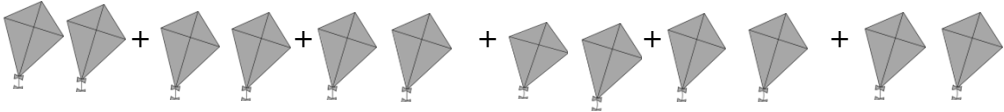



**Multiplication: Worksheet -2**

- How many groups of triangles are there?
- How many triangles are there in each group?
- Find the total number of triangles.

2. Write the addition sentence.



d)  + \_\_\_\_\_ + \_\_\_\_\_ + \_\_\_\_\_ + \_\_\_\_\_ + \_\_\_\_\_ + \_\_\_\_\_ = \_\_\_\_\_

e)  + \_\_\_\_\_ + \_\_\_\_\_ + \_\_\_\_\_ = \_\_\_\_\_

3. Take your own objects. Write a repeated addition sentence.

4. Draw any objects to represent given addition sentence.

a)  $4 + 4 + 4 + 4 + 4 = 20$

b)  $2 + 2 + 2 + 2 = 8$

c)  $3 + 3 + 3 + 3 + 3 = 15$

### HOTS :

1. There are 6 sweet boxes and each sweet box have 5 sweets.

Answer the following questions.

a) How many sweets are there in all ?

b) If 3 more sweets boxes are added. How many sweets are there in all ?

