

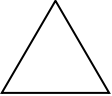




Shapes: Worksheet -7

1. Write the names of different flat shapes.
2. Draw the all flat shapes.
3. Draw the squares in different sizes.
4. Draw the rectangular in different sizes.
5. Draw the triangles in different sizes.
6. How many lines are used to make square and how they are.
7. How many lines are used to make rectangle and how they are.
8. How many lines are used to make triangles.
9. Name the flat shapes that can be drawn using only curved lines.



10. Match the following:

- | | | |
|--|---------|--------------|
| a)  | [] | a) oval |
| b)  | [] | b) square |
| c)  | [] | c) circle |
| d)  | [] | d) rectangle |
| e)  | [] | e) triangle |

HOTS:

1. What is the difference between square and rectangle.
2. What are the common points between square and rectangle.

