

Money: Worksheet -2

1. Identify the notes and coins.


















2. Match the following :

- 1)  [] a) Rs. 1
- 2)  [] b) Rs. 200
- 3)  [] c) Rs. 10
- 4)  [] d) Rs. 2
- 5)  [] e) Rs. 5

3. How much money in all ?

- a)  _____

- b)  _____

- c)  _____



d)



e)



f)

**HOTS :**

1. How much money is there altogether ?

