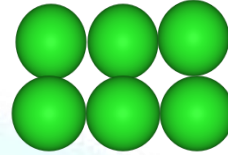



Addition and Subtraction: Worksheet – 3

1. There are 5 red balls and 6 green balls. How many more green balls are there ?



$$\underline{\quad\quad} - \underline{\quad\quad} = \underline{\quad\quad} \quad \text{check } \underline{\quad\quad} + \underline{\quad\quad} = \underline{\quad\quad}$$

2. Solve and check.

a) $5 + 4 =$

b) $3 + 5 =$

$9 - 4 =$

$8 - 3 =$

c) $10 - 3 =$

d) $5 - 1 =$

$7 + 3 =$

$4 + 1 =$

e) $7 - 5 =$

f) $6 + 4 =$

$5 + 2 =$

$10 - 4 =$

3. Ramya has 3 short note books and 2 long note books. How many books are there in all.



$$\underline{\quad\quad} + \underline{\quad\quad} = \underline{\quad\quad} \quad \text{check } \underline{\quad\quad} - \underline{\quad\quad} = \underline{\quad\quad}$$


4. Abdul has 8 mangoes. He gave three mangoes to his friend. How many mangoes does he have now ?



$$\underline{\quad\quad} - \underline{\quad\quad} = \underline{\quad\quad} \quad \text{check } \underline{\quad\quad} + \underline{\quad\quad} = \underline{\quad\quad}$$



5. Sravya has 3 balloons. Her father gave 2 more balloons. How many balloons does she have now ?



_____ + _____ = _____ check _____ - _____ = _____

HOTS :

1. Anusha has 8 stickers. She gave one sticker to her sister, 2 stickers to her brother and 2 stickers to her friend. How many stickers does she have now ? and draw picture.

