

Measurement : Worksheet -8


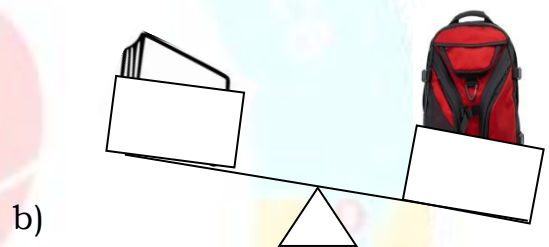
- 1) What is the use of simple balance ?

- 2) Name the places that you notice the balances.

- 3) If the plate of a balance is going up then the object is _____.
(heavier / lighter)

- 4) If the plate of a balance is going down then the object is _____.
(lighter / heavier)

- 5) Circle the heavier objects.



6. Arrange the given objects according to their weights (from lightest to heaviest).

a) apple, lemon, watermelon

b) brinjal, tomato, pumpkin

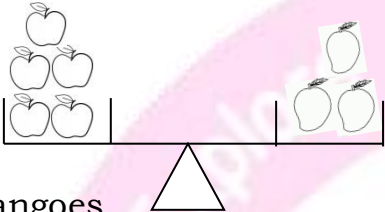


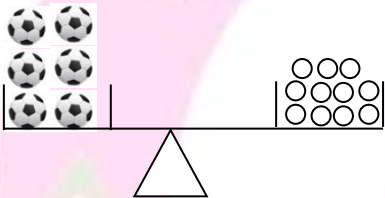
c) bag, book, pencil

d) table, bed, chair

HOTS :

1. Fill in the blanks.

a)  5 apples weigh as _____
mangoes.

b)  6 balls weigh as _____ laddoos.

