

Measurement : Worksheet -3

1. Who is the tallest person in your class ?


2. Who is the shortest person in your class ?

3. Tick (✓) the taller object.

a)



b)



c)



d)




e)



4. Put a (✓) the shortest object.


a)



b)



c)



d)



c)



5. True (or) False :

a) Book is longer than pencil. []

b) Book is shorter than eraser. []

c) Chair is longer than Dining table. []

HOTS :

1. Arrange the objects according to their lengths.

a) Ruler, Box, Book
_____ _____
longest shortest

