

## Measurement : Worksheet -2

1. Circle the longer object.

a) 


b) 


c) 


d)   



e)   


2. Circle the shortest object.

a) 

b) 

c) 

d) 



3. Write a longer object in your class room.

4. True (or) false :

- |                                    |         |
|------------------------------------|---------|
| a) Sofa is shorter than chair.     | [     ] |
| b) Saree is longer than frock.     | [     ] |
| c) Plank is shorter than eraser.   | [     ] |
| d) Pencil is longer than sharpner. | [     ] |
| e) Ruler is longer than pencil.    | [     ] |

HOTS :

1. Arrange the given objects according to their lengths.

- a)    pencil,        eraser,        ruler
- \_\_\_\_\_
- shorter                                  longer

