

Subtraction : Worksheet -10

1. Write addition facts.

a) $5 - 3 = 2$

b) $6 - 3 = 3$

c) $8 - 8 = 0$

d) $9 - 1 = 8$

e) $4 - 3 = 1$

2. Write subtraction sentences.

a) $6 + 2 = 8$

b) $5 + 1 = 6$

c) $7 + 3 = 10$

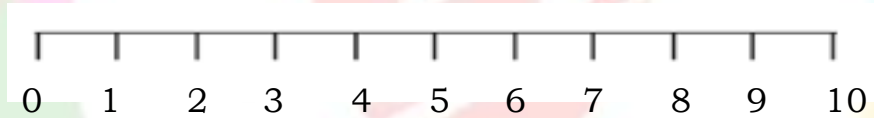
d) $5 + 4 = 9$

e) $7 + 1 = 8$

3. Start from a number and count forward to reach 10.

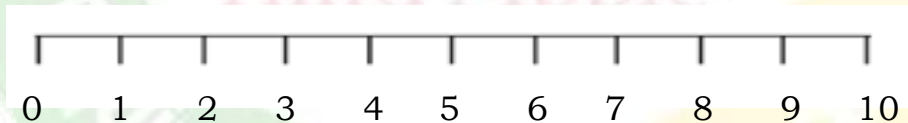
a) $8 + 2 =$ _____

$10 - 2 =$ _____



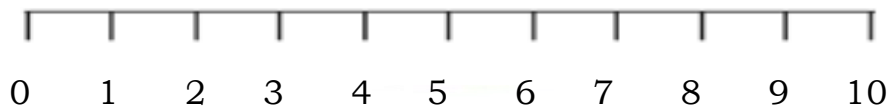
b) $6 + 4 =$ _____

$10 - 4 =$ _____



c) $5 + 5 =$ _____

$10 - 5 =$ _____



4. Complete the table.

a) $5 + 5 =$	$10 - 6 =$
b) $7 + 3 =$	$10 - 4 =$
c) $6 + 4 =$	$10 - 5 =$
d) $10 + 0 =$	$10 - 7 =$
e) $9 + 1 =$	$10 - 9 =$

HOTS :

1. Ramya has 5 kites. Her friend gave 2 more kites. Draw a picture and write its addition and subtraction fact.

