

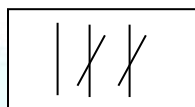
Subtraction : Worksheet -7

1. Complete the subtraction sentence for each picture complete the addition sentences

for each picture.

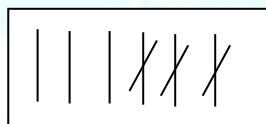
a) $3 - 2 =$ _____

$2 + 1 =$ _____



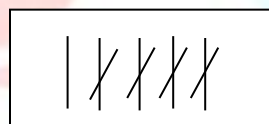
b) $6 - 3 =$ _____

$3 + 3 =$ _____



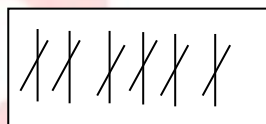
c) $5 - 4 =$ _____

$4 + 1 =$ _____



d) $6 - 6 =$ _____

$6 + 0 =$ _____



e) $6 - 0 =$ _____

$6 + 0 =$ _____



2. Match the following.

A) $5 - 2 = 3$ [] a) $1 + 3 = 4$

B) $4 - 3 = 1$ [] b) $3 + 2 = 5$

C) $6 - 4 = 2$ [] c) $5 + 3 = 8$

D) $8 - 3 = 5$ [] d) $2 + 7 = 9$

E) $9 - 2 = 7$ [] e) $4 + 2 = 6$



3. Subtract the following.

a) $\begin{array}{r} 3 \\ - 2 \\ \hline \end{array}$

$\begin{array}{r} 2 \\ + \\ \hline 3 \\ \hline \end{array}$

b) $\begin{array}{r} 6 \\ - 4 \\ \hline \end{array}$

$\begin{array}{r} 4 \\ + \\ \hline 6 \\ \hline \end{array}$

c) $\begin{array}{r} 6 \\ - 6 \\ \hline \end{array}$

$\begin{array}{r} 6 \\ + \\ \hline 6 \\ \hline \end{array}$

d) $\begin{array}{r} 8 \\ - 0 \\ \hline \end{array}$

$\begin{array}{r} 8 \\ + \\ \hline 8 \\ \hline \end{array}$

HOTS :

1. Write the subtraction sentences for given addition sentences

a) $6 + 2 = 8$

b) $9 + 1 = 10$

c) $7 + 0 = 7$

