

## Subtraction : Worksheet -4

1. Write the subtraction sentences for the following.



\_\_\_\_\_ Total number of balls

\_\_\_\_\_ No. of balls taken away

\_\_\_\_\_ No. of balls left

\_\_\_\_\_  \_\_\_\_\_  \_\_\_\_\_




\_\_\_\_\_ Total number of apples

\_\_\_\_\_ No. of apples taken away

\_\_\_\_\_ No. of apples left

\_\_\_\_\_  \_\_\_\_\_  \_\_\_\_\_



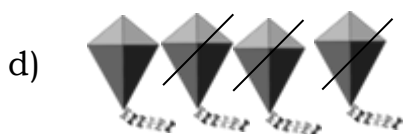
\_\_\_\_\_ Number of balloons in all

\_\_\_\_\_ No. of balloons taken away

\_\_\_\_\_ No. of balloons left

\_\_\_\_\_  \_\_\_\_\_  \_\_\_\_\_






\_\_\_\_\_ Number of kites

\_\_\_\_\_ No. of kites taken away

\_\_\_\_\_ No. of kites left

\_\_\_\_\_  \_\_\_\_\_  \_\_\_\_\_



\_\_\_\_\_ Number of mangoes in all

\_\_\_\_\_ No. of mangoes taken away

\_\_\_\_\_ No. of mangoes left

\_\_\_\_\_  \_\_\_\_\_  \_\_\_\_\_

2. Make your own pictures.

a)

\_\_\_\_\_ flowers in all

\_\_\_\_\_ flowers are taken away

\_\_\_\_\_ flowers left.



b)



\_\_\_\_\_ apples in all

\_\_\_\_\_ apples are taken away

\_\_\_\_\_ apples left.

c)



\_\_\_\_\_ mangoes in all

\_\_\_\_\_ mangoes are taken away

\_\_\_\_\_ mangoes left.

HOTS :

1. Draw a picture to represent

$$3 - 0 = 3$$

