


Subtraction : Worksheet -2

1. Sravya has 4 apples. She gave 2 apples to her brother. How many apples does she have now ?



2. Write what is left when you take away ?



_____ balls

_____ balls left



_____ balls

_____ balls left




_____ apples

_____ apples left



_____ smilies

_____ smilies left



_____ flowers

_____ flowers left





_____ fishes

_____ fishes left

3. Make your own pictures.

a) 6 mangoes 2 mangoes left



b) 10 balloons 6 balloons left




c) 8 apples 2 apples left



d) 6 kites 4 kites left



e) 5 flowers 4 flowers left



HOTS :

1. There were 8 apples in a basket. 5 apples were taken away. How many apples are left ?

Draw a picture to show subtraction.

