



Addition: Worksheet – 9

1. Draw the different ways to share 5 laddoos. Write the addition facts.

a)  +  = 5 + 0 = _____

b)  +  = 0 + 5 = _____

c)  +  = _____ + _____ = _____

d)  +  = _____ + _____ = _____


e)  +  = _____ + _____ = _____

f)  +  = _____ + _____ = _____

g)  +  = _____ + _____ = _____

h)  +  = _____ + _____ = _____

2. Draw the different ways to share 6 laddoos. Write the addition facts.

a)  +  = 6 + 0 = _____

b)  +  = 0 + 6 = _____

c)  +  = _____ + _____ = _____

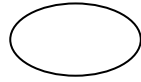
d)  +  = _____ + _____ = _____

e)  +  = _____ + _____ = _____

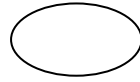


3. Sravya has 8 mangoes in all. She puts 5 mangoes in her bowl. How many mangoes

can she give to her brother ? Draw the mangoes.



Sravya



Sravya's brother

HOTS :

1. Anu has 3 pencils. Her mother gave 2 pencils to her. How many pencils in all. Draw the picture to show the addition sentence.

