





Addition: Worksheet – 8

1. Draw the laddoos. Write the addition facts.

a)  + 
 1 + 2 = _____

2 + 1 = _____

b)  + 
 3 + 1 = _____

1 + 3 = _____

c)  + 

2 + 5 = _____

5 + 2 = _____

d)  + 



3 + 4 = _____



 

4 + 3 = _____



2. Make your own picture write the addition fact. Flip it.

a)  + 
 _____ + _____ = _____

 + 
 _____ + _____ = _____

3. Check the totals of given addition.

a) 2
 + 3

 3
 + 2

b) 4
 + 5

 5
 + 4

c) 6
 + 1

 1
 + 6

d) 2
 + 6

 6
 + 2

e) 4
 + 3

 3
 + 4

f) 1
 + 3

 3
 + 1

HOTS :

1. Teacher asked to Siva do $2 + 3$ but Siva did $3 + 2$ and he say the answer 5. Did he get the correct answer ?

