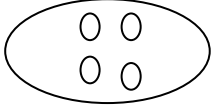
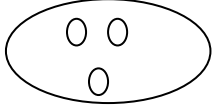




Addition: Worksheet - 6

1. Do the following.

a)  +  = _____






b)  +  = _____






c)  +  = _____

d)  +  = _____

2. Do the following.

a)  +  = _____
 +  = 

b)  +  = _____
 +  = 
 + =

c)  +  = _____
 +  = 



3. Do the following

a)

•	•	•		

 +

•	•			

 =

b)

•	•	•		
•	•	•		

 +

•	•	•		

 =

c)

•	•	•	•	•
•				

 +

•				

 =

d)

•	•	•	•	
•	•	•		

 +

 =

