



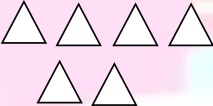


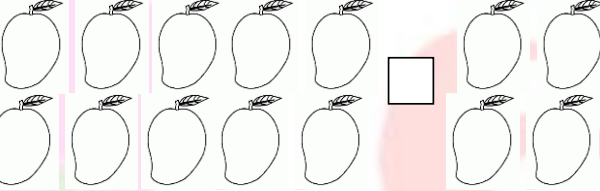
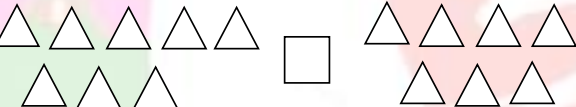



Addition: Worksheet – 3

1. Write the addition sentences using (+) and (=)

<p>a)  </p>	<p>___ ___ ___</p>
<p>b)  </p>	<p>___ ___ ___</p>
<p>c)  </p>	<p>___ ___ ___</p>
<p>d)  </p>	<p>___ ___ ___</p>
<p>e) </p>	<p>___ ___ ___</p>
<p>f) </p>	<p>___ ___ ___</p>
<p>g) </p>	<p>___ ___ ___</p>

2. Make an addition sentence with (+) and (=)

a) Swathi has 2 pens. She gets 3 more pens from her brother. How many pens

does she have in all ?

___ ___ ___

b) Sravya has 3 red balloons, and 5 green balloons. Find the total number of

balloons.

___ ___ ___

c) Arun has 3 apples and 4 bananas. How many fruits does he have in all.

___ ___ ___



d) A boy has 5 red balls and 2 yellow balls. Find the total number of balls ?

___ □ ___ □ ___ □

HOTS :

1. Draw your own picture to show the given addition.

$$\boxed{6} + \boxed{3} = 9$$

