








Counting Numbers below 10: Worksheet - 3

1. Write the number of balls 1 more 1 less.

1 less1 more

- a) 
- b) 
- c) 
- d) 
- e) 
- f) 
- g) 



II Do the following.

a) Arjun had 2 toffees. His mother gave one more toffee. How many toffees does Arjun have? Draw the picture.

b) Sowmya had 3 pencils. She gave one pencil to her brother. How many pencils does Sowmya have? Draw the picture.

HOTS: 1. I am a number more than 4 and less than 6. Who am I?

