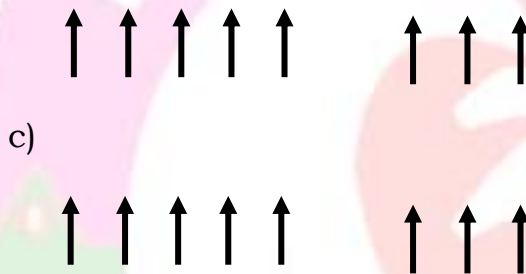


Counting Numbers below 10: Worksheet -28

1. Circle the group which has less objects.





2. Circle the group which has more objects.





3. Write which line shown more and which shows less.



4. Complete the pictures to show less and more.



a) _____ more



_____ less





b) _____ less



_____ more

5. Sita has 5 balloons and Ramu has 6 balloons who has more ?

HOTS : 1. Ramya has 10 toffees and Ranjitha has 5 toffees who has more and how many more

draw a picture.

