



Counting Numbers below 10: Worksheet -21

1. Write the number names for 1 to 10 numbers.

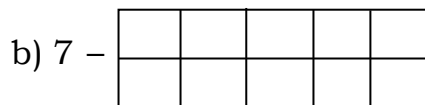

2. Count and write the number of objects.



3. Complete the given table.

Number	Number name
11	_____
_____	Fifteen
_____	Seventeen
19	_____
_____	Twenty

4. Represent the given number in 10 – frames.



5. True (or) False.

a) After number of 3 is 2. []

b) Before number of 6 is 5. []

c) Between number of 8 and 10 is 9. []

d)

•	•	•	•	•
•	•			

 []

e) 2 and 4 is the number pair of 6. []

