


Counting Numbers below 10: Worksheet -13

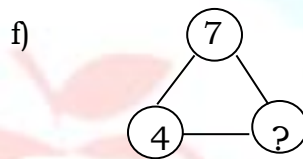
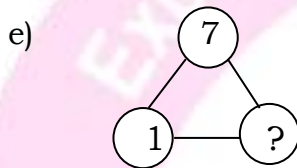
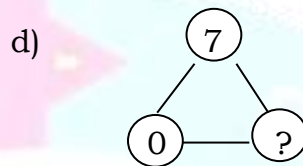
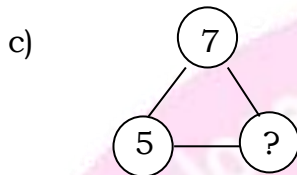
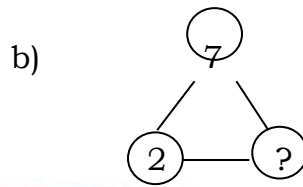
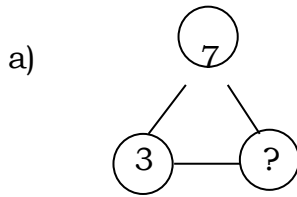
1. Circle the 7 objects from given objects.



2. Make the given objects into 7 objects.



3. Fill the missing numbers.



4. List the number pairs of 7.

HOTS :

1. I have 3 apples. I need _____ apples to make 7 apples.

2. I have 5 balloons. I need _____ balloons to make 7 balloons .

