






Money: Worksheet – 4

1. Complete the table.

	Coins and notes	Total amount
a)		<input type="text"/>
b)		<input type="text"/>
c)		<input type="text"/>
d)		<input type="text"/>
e)		<input type="text"/>
f)		<input type="text"/>
g)		<input type="text"/>
h)		<input type="text"/>



2. Represent the given money in coins and notes.

a) Rs. 16

b) Rs. 25

c) Rs. 18

d) Rs. 9

3. Sravya has two Rs. 5 coins, two Rs. 1 coins and one Rs. 10 note. What is the total amount that Sravya has ?

4. Ramya has two Rs. 10 notes, one Rs. 5 coin and three Rs. 1 coins. What is the total amount that Ramya has ?

