

Shapes: Worksheet - 10

1. Do the following.

a) Skip count by 2's.

2, 4, 6, 8, _____, _____, _____

b) Skip count by 3's.

3, 6, 9, 12, _____, _____, _____

c) Skip count by 5's.

5, 10, 15, 20, _____, _____, _____

d) Skip count by 10's.

10, 20, 30, 40, _____, _____, _____






2. Do the following.


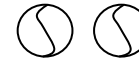






a) 14, 16, 18, 20, _____, _____

b) 50, 55, 60, 65, _____, _____

c) 23, 26, 29, 32, _____, _____

3. Draw the pictures that come next.

a)    _____
 

b)     _____
   



HOTS :

1. Draw the 5th picture of the given pattern.

