

Counting Numbers below 10: Worksheet -11

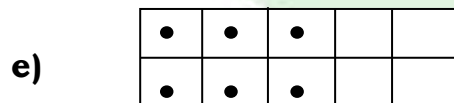
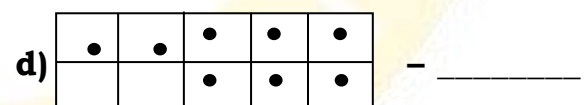
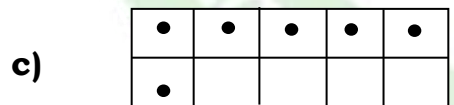
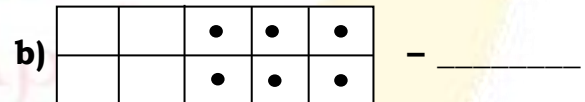
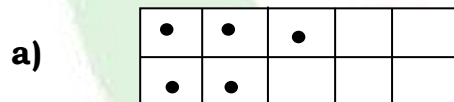
1. Make it into 5 balls.



2. Make it into 10 balls.



3. Count and write the number given in 10 – frames.



4. Match the following.

A)     [] a) 5

B)    [] b) 4

C)       [] c) 2

D)   [] d) 3

E)      [] e) 6

