





Shapes: Worksheet - 4


1. What will happen when you push each shape ? Complete the table.

	Solid shape	Slide	Roll	Why ?
a)				
b)				
c)				
d)				

2. Tick (✓) the objects that will roll.



3. Tick (✓) the objects that will slide.



4. Name any three objects that can be slide ?

5. Name any three objects that can be roll ?

HOTS :

1. Will this object roll (or) slide ? Why ?

