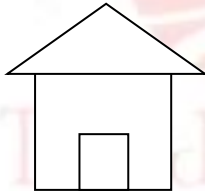
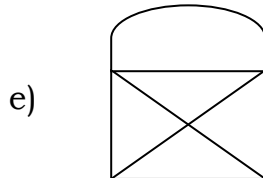
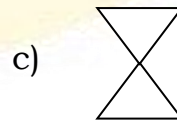
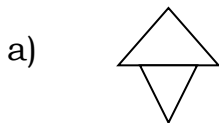


**Shapes: Worksheet – 1**

1. Draw a shape using straight lines.
2. Draw a shape using curved lines and straight lines.
3. Write a letter which is formed by both curved and straight lines.
4. How many straight lines are there.  

5. Write a letter (alphabet) which is formed by only curved lines.
6. Put a (✓) mark on the figure which has curved lines.



7. Match the following.

- |                  |         |        |
|------------------|---------|--------|
| A) standing line | [     ] | a) \   |
| B) slanting line | [     ] | b)     |
| C) sleeping line | [     ] | c) ( ) |
| D) curved line   | [     ] | d) —   |

